


Find Total Values of Coins


Name _____

Learning Target: Find the total value of a group of pennies, a group of nickels, or a group of dimes.


Think and Grow



The total value is 3¢.



The total value is 40¢.



The total value is 25¢.

Count by ones, fives, or tens.



Show and Grow

Count on to find the total value.

1. _____, _____, _____, _____

Total value: _____

2. _____, _____, _____

Total value: _____

3. _____, _____, _____, _____, _____, _____

Total value: _____

Practice

Count on to find the total value.



_____, _____, _____

Total value: _____




_____, _____, _____, _____

Total value: _____



_____, _____, _____, _____, _____, _____, _____, _____

Total value: _____

7.  **Number Sense** How many pennies do you need to make 50 cents? How many nickels? How many dimes?







8. **Modeling Real Life** Your friend buys the bouncy ball using 20 pennies. Tell another way to buy the bouncy ball using only nickels or dimes.

